


Addition Word Problems:

Read each story problem. Draw a picture in the box to show what is happening. Then write the equation to solve it.

1. Mia had 4 balloons. Her friend gave her 3 more. How many balloons does Mia have now?




Equation: ____ + ____ = ____

2. There were 6 ducks swimming in a pond. 2 more ducks joined them. How many ducks are in the pond?



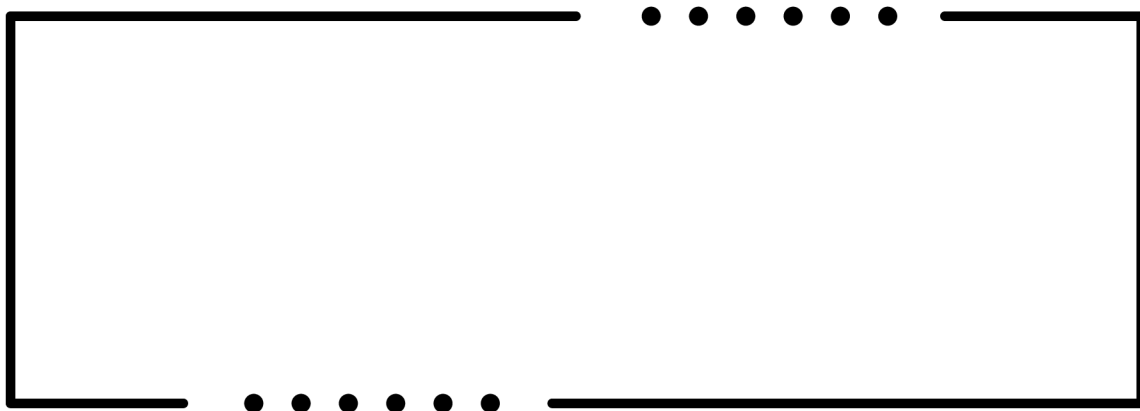
Equation: ____ + ____ = ____

3. Jack picked 5 flowers in the garden. His sister picked 4 more. How many flowers do they have altogether?



Equation: ____ + ____ = ____

4. A bowl had 7 apples. Dad added 2 more apples. How many apples are in the bowl now?



Equation: ____ + ____ = ____